


# Jusque 20



Regarde ces  
jolies fleurs ...



Compte les fleurs et colorie les cases exactes.

dix-huit

17

$15 + 3$


$20 - 5$

dix-sept

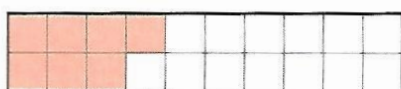
quinze

$9 \times 2$

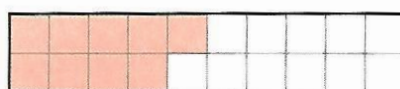
$8 + 10$



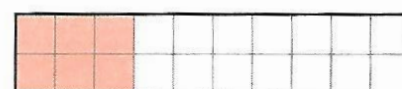
Colorie les carreaux manquants et complète l'égalité.



$$7 + \dots = 15$$



$$9 + \dots = 14$$



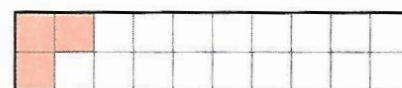
$$6 + \dots = 16$$



$$12 + \dots = 18$$



$$14 + \dots = 20$$



$$3 + \dots = 17$$



$$15 + 3 = \dots$$

$$18 - 7 = \dots$$

$$15 - 2 = \dots$$

$$16 - 13 = \dots$$

$$19 - 17 = \dots$$

$$18 = 11 + \dots$$

$$12 = 15 - \dots$$

$$13 = 3 + \dots$$

$$5 = 16 - \dots$$

$$16 = 8 + \dots$$

$$12 = 20 - \dots$$

$$18 = \dots + 7$$

$$13 = \dots + 9$$

$$16 = \dots - 4$$

$$14 = \dots + 9$$

$$5 = 12 - \dots$$

$$17 = 13 + \dots$$

$$\dots + 12 = 20$$

$$\dots + 5 = 16$$

$$\dots - 8 = 11$$


$$\dots - 4 = 16$$

$$\dots + 17 = 19$$


$$\dots - 11 = 6$$



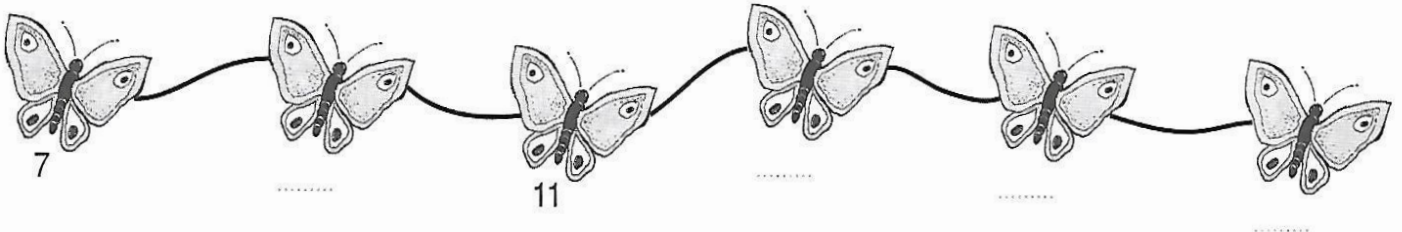
des sauts de - 2



des sauts de + 3



des sauts de + 2



18
13 + .....
..... + 7
5 + ..... + 6
7 + 8 + .....

12
9 + .....
..... + 5
5 + 5 + .....
..... + 8 + 1

20
..... + 14
12 + .....
9 + ..... + 4
..... + 3 + 8

17
..... + 9
13 + .....
10 + 3 + .....
4 + ..... + 5

$$8 + 7$$

$$8 + 2 + \dots = \dots$$

$$8 + 7 = \dots$$

$$9 + 5$$

$$9 + \dots + \dots = \dots$$

$$9 + 5 = \dots$$

$$7 + 6$$

$$7 + \dots + \dots = \dots$$

$$7 + 6 = \dots$$

$$8 + 8$$

$$8 + \dots + \dots = \dots$$

$$8 + 8 = \dots$$

$$15 - 8$$

$$15 - 5 - \dots = \dots$$

$$15 - 8 = \dots$$

$$12 - 7$$

$$12 - \dots - \dots = \dots$$

$$12 - 7 = \dots$$

$$16 - 9$$

$$16 - \dots - \dots = \dots$$

$$16 - 9 = \dots$$

$$11 - 4$$

$$11 - \dots - \dots = \dots$$

$$11 - 4 = \dots$$

